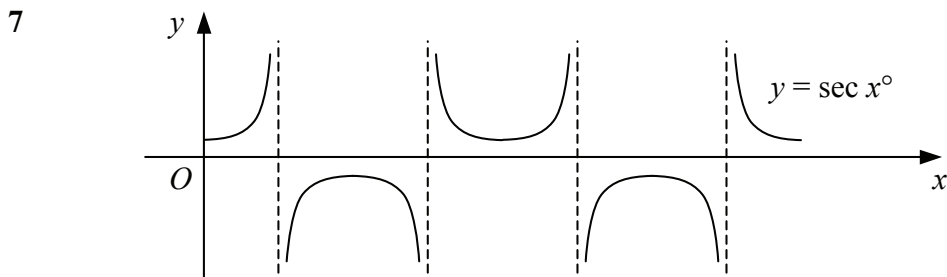



- 1 Find to 2 decimal places the value of
a $\sec 23^\circ$ **b** $\operatorname{cosec} 185^\circ$ **c** $\cot 251.9^\circ$ **d** $\sec(-302^\circ)$
- 2 Find the exact value of
a $\operatorname{cosec} 30^\circ$ **b** $\cot 45^\circ$ **c** $\sec 150^\circ$ **d** $\operatorname{cosec} 300^\circ$
e $\cot 90^\circ$ **f** $\sec 225^\circ$ **g** $\operatorname{cosec} 270^\circ$ **h** $\cot 330^\circ$
i $\sec 660^\circ$ **j** $\operatorname{cosec}(-45^\circ)$ **k** $\cot(-240^\circ)$ **l** $\sec(-315^\circ)$
- 3 Find to 2 decimal places the value of
a $\cot 0.56^\circ$ **b** $\operatorname{cosec} 1.74^\circ$ **c** $\sec(-2.07^\circ)$ **d** $\cot 9.8^\circ$
- 4 Find in exact form, with a rational denominator, the value of
a $\sec 0$ **b** $\operatorname{cosec} \frac{\pi}{4}$ **c** $\cot \frac{3\pi}{4}$ **d** $\sec \frac{4\pi}{3}$
e $\operatorname{cosec} \frac{2\pi}{3}$ **f** $\cot \frac{7\pi}{2}$ **g** $\sec \frac{5\pi}{4}$ **h** $\operatorname{cosec}(-\frac{5\pi}{6})$
i $\cot \frac{11\pi}{6}$ **j** $\sec(-4\pi)$ **k** $\operatorname{cosec} \frac{13\pi}{4}$ **l** $\cot(-\frac{7\pi}{3})$
- 5 Given that $\sin x = \frac{4}{5}$ and that $0 < x < 90^\circ$, find without using a calculator the value of
a $\cos x$ **b** $\tan x$ **c** $\operatorname{cosec} x$ **d** $\sec x$
- 6 Given that $\cos x = -\frac{5}{13}$ and that $90^\circ < x < 180^\circ$, find without using a calculator the value of
a $\sin x$ **b** $\sec x$ **c** $\operatorname{cosec} x$ **d** $\cot x$



The graph shows the curve $y = \sec x^\circ$ in the interval $0 \leq x \leq 720$.

- a** Write down the coordinates of the turning points of the curve.
b Write down the equations of the asymptotes.
- 8 Sketch each pair of curves on the same set of axes in the interval $-180^\circ \leq x \leq 180^\circ$.
a $y = \sin x$ and $y = \operatorname{cosec} x$ **b** $y = \tan x$ and $y = \cot x$
- 9 Sketch each of the following curves for x in the interval $0 \leq x \leq 2\pi$. Show the coordinates of any turning points and the equations of any asymptotes.
a $y = 3 \sec x$ **b** $y = 1 + \operatorname{cosec} x$ **c** $y = \cot 2x$
d $y = \operatorname{cosec}(x - \frac{\pi}{4})$ **e** $y = \sec \frac{1}{3}x$ **f** $y = 3 + 2 \operatorname{cosec} x$
g $y = 1 - \sec 2x$ **h** $y = 2 \cot(x + \frac{\pi}{2})$ **i** $y = 1 + \sec(x - \frac{\pi}{6})$



10 Solve each equation for x in the interval $0 \leq x \leq 2\pi$, giving your answers in terms of π .

a $\cot x = 1$ **b** $\sec x = 2$ **c** $\operatorname{cosec} x = \sqrt{2}$ **d** $\cot x = 0$
e $\sec x = -1$ **f** $\operatorname{cosec} x = -2$ **g** $\cot x = -\sqrt{3}$ **h** $\sec x = -\sqrt{2}$

11 Solve each equation for θ in the interval $0 \leq \theta \leq 360^\circ$, giving your answers to 1 decimal place.

a $\sec \theta = 1.8$ **b** $\operatorname{cosec} \theta = 2.57$ **c** $\cot \theta = 1.06$ **d** $\sec \theta = -2.63$
e $\operatorname{cosec} \theta = 3$ **f** $\cot \theta = -0.94$ **g** $\sec \theta = 1.888$ **h** $\operatorname{cosec} \theta = -1.2$

12 Solve each equation for x in the interval $-180 \leq x \leq 180$

Give your answers to 1 decimal place where appropriate

a $\operatorname{cosec} (x + 30)^\circ = 2$ **b** $\cot (x - 57)^\circ = 1.6$ **c** $\sec 2x^\circ = 2.35$
d $5 - 2 \cot x^\circ = 0$ **e** $\sqrt{3} \sec (x - 60)^\circ = 2$ **f** $2 \operatorname{cosec} \frac{1}{2}x^\circ - 7 = 0$
g $\sec (2x - 18)^\circ = -1.3$ **h** $\operatorname{cosec} 3x^\circ = -3.4$ **i** $\cot (2x + 135)^\circ = 1$

13 Solve each equation for θ in the interval $0 \leq \theta \leq 360$.

Give your answers to 1 decimal place where appropriate.

a $\operatorname{cosec}^2 \theta^\circ - 4 = 0$ **b** $\sec^2 \theta^\circ - 2 \sec \theta^\circ - 3 = 0$
c $\cot \theta^\circ \operatorname{cosec} \theta^\circ = 6 \cot \theta^\circ$ **d** $\operatorname{cosec} \theta^\circ = 4 \sec \theta^\circ$
e $2 \cos \theta^\circ = \cot \theta^\circ$ **f** $5 \sin \theta^\circ - 2 \operatorname{cosec} \theta^\circ = 3$

14 Solve each equation for x in the interval $-\pi \leq x \leq \pi$.

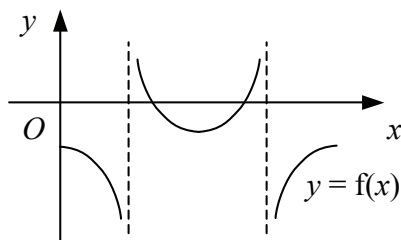
Give your answers to 2 decimal places.

a $2 \operatorname{cosec}^2 x + 5 \operatorname{cosec} x - 12 = 0$ **b** $\sec x = 3 \tan x$
c $3 \sec x = 2 \cot x$ **d** $4 + \tan x = 5 \cot x$
e $\operatorname{cosec} x + 5 \cot x = 0$ **f** $6 \tan x - 5 \operatorname{cosec} x = 0$

15 Prove each identity.

a $\sec x - \cos x \equiv \sin x \tan x$ **b** $(1 + \cos x)(\operatorname{cosec} x - \cot x) \equiv \sin x$
c $\frac{\cot x - \cos x}{1 - \sin x} \equiv \cot x$ **d** $(\sin x + \tan x)(\cos x + \cot x) \equiv (1 + \sin x)(1 + \csc x)$


16




The diagram shows the curve $y = f(x)$, where

$$f(x) \equiv 2 \cos x - 3 \sec x - 5, \quad x \in \mathbb{R}, \quad 0 \leq x \leq 2\pi.$$


- a** Find the coordinates of the point where the curve meets the y -axis.
b Find the coordinates of the points where the curve crosses the x -axis.



- 1 $f(x) \equiv \sin x, x \in \mathbb{R}, -\frac{\pi}{2} \leq x \leq \frac{\pi}{2}.$
- State the range of f .
 - Define the inverse function $f^{-1}(x)$ and state its domain.
 - Sketch on the same diagram the graphs of $y = f(x)$ and $y = f^{-1}(x)$.
- 2 Find, in radians in terms of π , the value of
- $\arcsin 0$
 - $\arcsin \frac{1}{\sqrt{2}}$
 - $\arcsin(-1)$
 - $\arcsin\left(-\frac{\sqrt{3}}{2}\right)$
- 3 $g(x) \equiv \cos x, x \in \mathbb{R}, 0 \leq x \leq \pi.$
- Define the inverse function $g^{-1}(x)$ and state its domain.
 - Sketch on the same diagram the graphs of $y = g(x)$ and $y = g^{-1}(x)$.
- 4 $h(x) \equiv \tan x, x \in \mathbb{R}, -\frac{\pi}{2} < x < \frac{\pi}{2}.$
- Define the inverse function $h^{-1}(x)$ and state its domain.
 - Sketch on the same diagram the graphs of $y = h(x)$ and $y = h^{-1}(x)$.
- 5 Find, in radians in terms of π , the value of
- $\arccos 1$
 - $\arctan \sqrt{3}$
 - $\arccos \frac{\sqrt{3}}{2}$
 - $\arcsin\left(-\frac{1}{2}\right)$
 - $\arctan(-1)$
 - $\arccos(-1)$
 - $\arctan\left(-\frac{1}{\sqrt{3}}\right)$
 - $\arccos\left(-\frac{1}{\sqrt{2}}\right)$
- 6 Find, in radians to 2 decimal places, the value of
- $\arcsin 0.6$
 - $\arccos 0.152$
 - $\arctan 4.7$
 - $\arcsin(-0.38)$
 - $\arccos 0.92$
 - $\arctan(-0.46)$
 - $\arcsin(-0.506)$
 - $\arccos(-0.75)$
- 7 Solve
- $\arcsin x = \frac{\pi}{4}$
 - $\arccos x = 0$
 - $\arctan x = -\frac{\pi}{3}$
 - $\arccos 2x = \frac{\pi}{6}$
 - $\frac{\pi}{4} - \arctan x = 0$
 - $6 \arcsin x + \pi = 0$
- 8 Solve each equation, giving your answers to 3 significant figures.
- $\arccos x = 2$
 - $\arcsin x = -0.7$
 - $\arctan 3x = 0.96$
 - $1 - \arcsin x = 0$
 - $2 + 3 \arctan x = 0$
 - $3 - \arccos 2x = 0$
- 9 $f(x) \equiv \arccos x - \frac{\pi}{3}, x \in \mathbb{R}, -1 \leq x \leq 1.$
- State the value of $f\left(-\frac{1}{2}\right)$ in terms of π .
 - Solve the equation $f(x) = 0$.
 - Define the inverse function $f^{-1}(x)$ and state its domain.



- 1 a Write down the identities for $\sin(A + B)$ and $\cos(A + B)$.
 b Use these identities to obtain similar identities for $\sin(A - B)$ and $\cos(A - B)$.
 c Use the above identities to obtain similar identities for $\tan(A + B)$ and $\tan(A - B)$.
- 2 Express each of the following in the form $\sin \alpha$, where α is acute.
 a $\sin 10^\circ \cos 30^\circ + \cos 10^\circ \sin 30^\circ$ b $\sin 67^\circ \cos 18^\circ - \cos 67^\circ \sin 18^\circ$
 c $\sin 62^\circ \cos 74^\circ + \cos 62^\circ \sin 74^\circ$ d $\cos 14^\circ \cos 39^\circ - \sin 14^\circ \sin 39^\circ$
- 3 Express as a single trigonometric ratio
 a $\cos A \cos 2A - \sin A \sin 2A$ b $\sin 4A \cos B - \cos 4A \sin B$
 c $\frac{\tan 2A + \tan 5A}{1 - \tan 2A \tan 5A}$ d $\cos A \cos 3A + \sin A \sin 3A$
- 4 Find in exact form, with a rational denominator, the value of
 a $\sin 15^\circ$ b $\sin 165^\circ$ c $\operatorname{cosec} 15^\circ$ d $\cos 75^\circ$
 e $\cos 15^\circ$ f $\sec 195^\circ$ g $\tan 75^\circ$ h $\operatorname{cosec} 105^\circ$
- 5 Find the maximum value that each expression can take and the smallest positive value of x , in degrees, for which this maximum occurs.
 a $\cos x \cos 30^\circ + \sin x \sin 30^\circ$ b $3 \sin x \cos 45^\circ + 3 \cos x \sin 45^\circ$
 c $\sin x \cos 67^\circ - \cos x \sin 67^\circ$ d $4 \sin x \sin 108^\circ - 4 \cos x \cos 108^\circ$
- 6 Find the minimum value that each expression can take and the smallest positive value of x , in radians in terms of π , for which this minimum occurs.
 a $\sin x \cos \frac{\pi}{3} - \cos x \sin \frac{\pi}{3}$ b $2 \cos x \cos \frac{\pi}{6} - 2 \sin x \sin \frac{\pi}{6}$
 c $\cos 4x \cos x + \sin 4x \sin x$ d $6 \sin 2x \cos 3x - 6 \sin 3x \cos 2x$
- 7 Given that $\sin A = \frac{4}{5}$, $0 < A < 90^\circ$ and that $\cos B = \frac{2}{3}$, $0 < B < 90^\circ$, find without using a calculator the value of
 a $\tan A$ b $\sin B$ c $\cos(A + B)$ d $\sin(A + B)$
- 8 Given that $\operatorname{cosec} C = \frac{5}{3}$, $0 < C < 90^\circ$ and that $\sin D = \frac{5}{13}$, $90^\circ < D < 180^\circ$, find without using a calculator the value of
 a $\cos C$ b $\cos D$ c $\sin(C - D)$ d $\sec(C - D)$
- 9 Solve each equation for θ in the interval $0 \leq \theta \leq 360$.
 Give your answers to 1 decimal place where appropriate.
 a $\sin \theta^\circ \cos 15^\circ + \cos \theta^\circ \sin 15^\circ = 0.4$ b $\frac{\tan 2\theta^\circ - \tan 60^\circ}{1 + \tan 2\theta^\circ \tan 60^\circ} = 1$
 c $\cos(\theta - 60)^\circ = \sin \theta^\circ$ d $2 \sin \theta^\circ + \sin(\theta + 45)^\circ = 0$
 e $\sin(\theta + 30)^\circ = \cos(\theta - 45)^\circ$ f $3 \cos(2\theta + 60)^\circ - \sin(2\theta - 30)^\circ = 0$



- 10 Find the value of k such that for all real values of x

$$\cos\left(x + \frac{\pi}{3}\right) - \cos\left(x - \frac{\pi}{3}\right) \equiv k \sin x.$$

- 11 Prove each identity.

a $\cos x - \cos\left(x - \frac{\pi}{3}\right) \equiv \cos\left(x + \frac{\pi}{3}\right)$

b $\sin\left(x - \frac{\pi}{6}\right) + \cos x \equiv \sin\left(x + \frac{\pi}{6}\right)$

- 12 a Use the identity for $\sin(A + B)$ to express $\sin 2A$ in terms of $\sin A$ and $\cos A$.
 b Use the identity for $\cos(A + B)$ to express $\cos 2A$ in terms of $\sin A$ and $\cos A$.
 c Hence, express $\cos 2A$ in terms of
 i $\cos A$ ii $\sin A$
 d Use the identity for $\tan(A + B)$ to express $\tan 2A$ in terms of $\tan A$.

- 13 Solve each equation for x in the interval $0 \leq x \leq 360^\circ$.

Give your answers to 1 decimal place where appropriate.

a $\cos 2x + \cos x = 0$

b $\sin 2x + \cos x = 0$

c $2 \cos 2x = 7 \sin x$

d $11 \cos x = 4 + 3 \cos 2x$

e $\tan 2x - \tan x = 0$

f $\sec x - 4 \sin x = 0$

g $5 \sin 4x = 2 \sin 2x$

h $2 \sin^2 x - \cos 2x - \cos x = 0$

- 14 Prove each identity.

a $(\cos x + \sin x)^2 \equiv 1 + \sin 2x$

b $\tan x (1 + \cos 2x) \equiv \sin 2x$

c $\frac{2 \sin x}{2 \cos x - \sec x} \equiv \tan 2x$

d $\tan x + \cot x \equiv 2 \operatorname{cosec} 2x$

e $\operatorname{cosec} 2x - \cot 2x \equiv \tan x$

f $(\cos x + \sin x)(\operatorname{cosec} x - \sec x) \equiv 2 \cot 2x$

g $\frac{1 - \sin 2x}{\operatorname{cosec} x - 2 \cos x} \equiv \sin x$

h $\cos 3x \equiv 4 \cos^3 x - 3 \cos x$

- 15 Use the double angle identities to prove that

a $\cos x \equiv 2 \cos^2 \frac{x}{2} - 1$


b $\sin^2 \frac{x}{2} \equiv \frac{1}{2}(1 - \cos x)$

- 16 a Given that $\cos A = \frac{7}{9}$, $0 < A < 90^\circ$, find the exact value of $\sin \frac{A}{2}$ without using a calculator.
 b Given that $\cos B = -\frac{3}{8}$, $90^\circ < B < 180^\circ$, find the value of $\cos \frac{B}{2}$, giving your answer in the form $k\sqrt{5}$.

- 17 Prove each identity.

a $\frac{2}{1 + \cos x} \equiv \sec^2 \frac{x}{2}$

b $\frac{1 + \cos x}{1 - \cos x} \equiv \cot^2 \frac{x}{2}$



- 1 a Write down the identities for $\sin(A + B)$ and $\sin(A - B)$.
 b Hence, express $2 \sin A \cos B$ in terms of $\sin(A + B)$ and $\sin(A - B)$.
 c Use the identities for $\cos(A + B)$ and $\cos(A - B)$ to obtain similar expressions for $2 \cos A \cos B$ and $2 \sin A \sin B$.

- 2 Express each of the following as the sum or difference of trigonometric functions.

- | | |
|-----------------------------------|-----------------------------------|
| a $2 \sin 30^\circ \cos 10^\circ$ | b $2 \cos 36^\circ \cos 18^\circ$ |
| c $\cos 49^\circ \sin 25^\circ$ | d $2 \sin 3A \sin A$ |
| e $2 \cos 5A \sin 2A$ | f $4 \cos 3A \cos B$ |
| g $\sin A \cos 6B$ | h $2 \cos A \sin(A + 40^\circ)$ |

- 3 a Use the identity for $2 \sin A \cos B$ to prove that

$$\sin P + \sin Q \equiv 2 \sin \frac{P+Q}{2} \cos \frac{P-Q}{2}.$$

- b Obtain similar identities for

- i $\sin P - \sin Q$
- ii $\cos P + \cos Q$
- iii $\cos P - \cos Q$

- 4 Express each of the following as the product of trigonometric functions.

- | | |
|-----------------------------------|---|
| a $\cos 25^\circ + \cos 15^\circ$ | b $\sin 84^\circ - \sin 30^\circ$ |
| c $\sin 5A + \sin A$ | d $\cos A - \cos 2A$ |
| e $\cos 2A - \cos 4B$ | f $\sin(A + 30^\circ) + \sin(A + 60^\circ)$ |
| g $2 \cos A + 2 \cos 3A$ | h $\sin(A + 2B) - \sin(3A - B)$ |

- 5 Solve each equation for x in the interval $0 \leq x \leq \pi$.

Give your answers to 2 decimal places where appropriate.

- | | |
|-----------------------------------|---|
| a $\sin 3x - \sin x = 0$ | b $\cos x = \cos 4x$ |
| c $2 \sin x \sin 5x = \cos 4x$ | d $8 \cos(x + \frac{\pi}{3}) \sin(x + \frac{\pi}{6}) = 1$ |
| e $\sin x + \sin \frac{x}{2} = 0$ | f $\cos 3x + \cos x = \cos 2x$ |

- 6 Solve each equation for x in the interval $0 \leq x \leq 180^\circ$.

- | | |
|------------------------------------|---|
| a $2 \cos 2x \cos 3x - \cos x = 0$ | b $\sin 3x - \sin 2x = 0$ |
| c $\sin 4x + \sin 2x = \sin 3x$ | d $\cos 2x = \cos(x - 60^\circ)$ |
| e $\cos 5x \sin x + \sin 4x = 0$ | f $\sin x + \sin 3x = \cos x + \cos 3x$ |

- 7 Prove each identity.

- a $\sin x + \sin 2x + \sin 3x \equiv \sin 2x (2 \cos x + 1)$
- b $\frac{\cos x - \cos 3x}{\cos x + \cos 3x} \equiv \tan x \tan 2x$

